

Reading

- Who are the people?
- Why are they here?
- Why are they wearing special glasses and belts? What do they do?
- Who was buried inside this tomb?
- Why is it called the tomb of the emerald snake?



Mental Maths and fluency

- 1) Round 86 to the nearest 10.
- 2) Half of 26.
- 3) $30 - 7$
- 4) Double 34.

How much more to make £1?



Spelling

our sounding /er/ or our sounding /oor/

lick the correct sound you can hear in each word

	/er/	/oor/
glamour	✓	
your		
court		
humour		

Maths

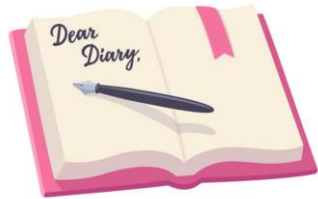
Fill in the missing digits.

		H	T	O	
		4		6	
	+	2	8		
			1	9	

		H	T	O	
			3	8	
	+	3			
		8	4	6	

History

Can you write a diary as if you were a child working in a factory in the 19th century?




D&T

Can you draw your own cereal bar? Think about the design, the name of your cereal bar and the colours!




Science

Can you describe each rock? What they look like and where might you find these rocks



PSHE

Can you write a situation where you had to think about someone else's point of view?



French

Can you match the name of the animals to their pictures?



un singe

une souris

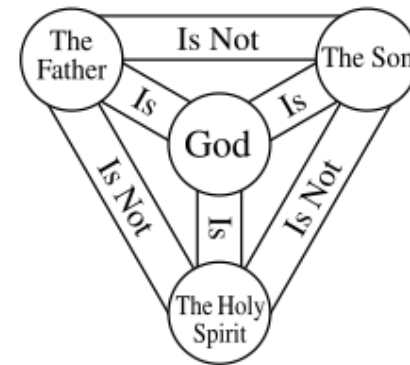
un canard

une vache

un mouton

RE

Can you draw a picture to represent the Trinity?



Year 3's Home Learning

Homework due back on 13.11.24